

# Sikkim Public Service Commission

Main Written Examination for the Post of  
**Accounts Clerk / Junior Storekeeper**

Time Allowed :  $2\frac{1}{2}$  Hrs.

Maximum Marks : 140

## INSTRUCTIONS TO CANDIDATES

*Read the following instructions carefully before answering the questions :-*

1. IMMEDIATELY AFTER THE COMMENCEMENT OF THE EXAMINATION, YOU SHOULD CHECK THAT THIS TEST BOOKLET DOES NOT HAVE ANY UNPRINTED OR TORN OR MISSING PAGES OR ITEMS ETC. IF SO, GET IT REPLACED BY A COMPLETE TEST BOOKLET.
2. Please note that it is the candidate's responsibility to fill in the Roll Number carefully and without any omission or discrepancy at the appropriate places in the **OMR ANSWER SHEET**.
3. **Use only Black Ball Point Pen to fill the OMR sheet**
4. Do not write anything else on the OMR Answer Sheet except the required information.
5. **This Test Booklet contains 110 items (questions) in MCQ Mode to be marked in OMR Sheet.**
6. **All items from Q.1 to Q. 30 carries 2 marks each and Q. 31 to Q. 110 carries 1 marks each.**
7. Before you proceed to mark in the Answer Sheet (OMR), you have to fill in some particulars in the Answer Sheet (OMR) as per given instructions.
8. After you have completed filling in all your responses on the Answer Sheet (OMR) and the examination has concluded, you should hand over the Answer Sheet (OMR) to the Invigilator only. You are permitted to take away with you the Test Booklet.
9. **Marking Scheme**  
THERE WILL BE NEGATIVE MARKING FOR WRONG ANSWERS MARKED BY A CANDIDATE IN THE OBJECTIVE TYPE QUESTION PAPERS.
  - (i) There are four alternatives for the answer to every question. For each question for which a wrong answer has been given by the candidate, one-third of the marks assigned to that question will be deducted as penalty.
  - (ii) If a candidate gives more than one answer, it will be treated as a wrong answer even if one of the given answers happens to be correct and there will be same penalty as above to the question.
  - (iii) If a question is left blank. i.e., no answer is given by the candidate, there will be no penalty for that question.

**DO NOT OPEN THIS TEST BOOKLET UNTIL YOU ARE ASKED TO DO SO**

### Arithmetic

1. One-fourth of a number exceeds its one-seventh by 24. What is the number?
  - A. 300
  - B. 250
  - C. 224
  - D. 226
2. Find the value of -
$$9.6 \times 3.6 \div 7.2 + 10.8 \text{ of } \frac{1}{18} - \frac{1}{10}$$
  - A. 4.8
  - B. 5.3
  - C. 5.4
  - D. None of these
3. Seven bells ring at intervals of 2, 3, 4, 6, 8, 9 and 12 minutes respectively. They started ringing simultaneously at 4 a.m. What will be the next time when they all ring simultaneously?
  - A. 6.12 a.m.
  - B. 5.12 a.m.
  - C. 4.30 a.m.
  - D. 5.00 a.m.
4. Find the rate of simple interest if the simple interest for the sum of Rs. 1500 is Rs. 50 in 4 years and Rs. 80 in 8 years?
  - A. 0.5%
  - B. 2%
  - C. 0.8%
  - D. 1%
5. The number obtained by interchanging the digits of a two digit number is more than the original number by 27. If the sum of the digits is 13, then what is the original number?
  - A. 85
  - B. 90
  - D. 58
  - C. 60
6. Find the third proportional to 15 and 30
  - A. 20
  - B. 70
  - C. 45
  - D. 60

7. A garrison of 1000 men had provisions for 48 days. If a reinforcement of 600 men arrived, then how long will the food last?
- A. 30 days
  - B. 35 days
  - C. 25 days
  - D. None of these
8. 20 gram is what percent of 1 kg?
- A. 1%
  - B. 5%
  - C. 2%
  - D. 4%
9. Find the sum of first 84 even numbers?
- A. 6720
  - B. 7140
  - C. 7540
  - D. 7220
10. P and Q jointly start a business. The investment of P is equal to three times the investment of Q. If the annual profit is Rs. 52000, then the share of P is -
- A. Rs. 39000
  - B. Rs. 35000
  - C. Rs. 42000
  - D. Rs. 40000
11. What sum of money will amount to Rs. 9261 in 3 years at 5% per annum compound interest?
- A. Rs. 6000
  - B. Rs. 8200
  - C. Rs. 5580
  - D. Rs. 8000
12. Kapil sold an article for Rs. 3072 at a loss of 20%. What percent will he gain if he sells it for Rs. 4080?
- A. 6.25%
  - B. 5.25%
  - C. 6.50%
  - D. 5.50%
13. The average age of 25 boys in a class decreases by 6 months when a new boy takes the place of a 20 year old boy. Find out the age of new boy?
- A. 7 years
  - B. 6 years
  - C. 6.5 years
  - D. 7.5 years

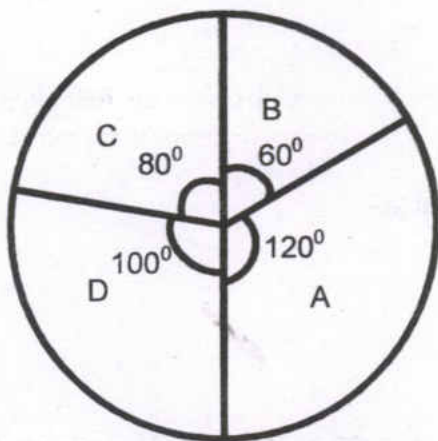


14. Ravi can do a piece of work in 3 days while Anil can do the same work in 4 days. If they work together for a total wages of Rs. 2800, then how much does Ravi get?
- A. Rs. 1300  
B. Rs. 1500  
C. Rs. 1600  
D. Rs. 1650
15. Find the value of -
- $$\frac{(0.137 + 0.098)^2 + (0.137 - 0.098)^2}{0.137 \times 0.137 + 0.098 \times 0.098}$$
- A. 0.2  
B. 2  
C. 4  
D. 0.4
16. A bag contains 50p, 25p and 10p coins in the ratio of 5 : 9 : 4. If the total money in the bag is Rs. 412, find the number of 50p coins?
- A. 410  
B. 320  
C. 400  
D. 200
17. A sum of money becomes four times in 20 years at simple interest. Find the annual rate of simple interest?
- A. 10%  
B. 15%  
C. 20%  
D. 25%
18. The product of first three composite numbers is equal to -
- A. 192  
B. 162  
C. 48  
D. 240
19. Arun scored 36 marks in English, 44 marks in Science, 75 marks in Mathematics and x marks in Geography. If the average marks scored by him is 50, then the value of x is -
- A. 35  
B. 50  
C. 40  
D. 45

20. The HCF and LCM of two numbers are 4 and 496 respectively. If one of the number is 124, then find the other number?
- A. 15  
B. 18  
C. 16  
D. 13
21. The price of milk is increased by 25%. If a family wants to keep its expenses on milk unaltered, then the family will have to reduce the consumption of milk by -
- A. 18%  
B. 25%  
C. 24%  
D. 20%
22. Sita bought an umbrella from a shop at Rs. 255 after getting a discount of 15% on the marked price. What was the marked price of the umbrella?
- A. Rs. 250  
B. Rs. 300  
C. Rs. 400  
D. Rs. 200

Directions (Q. Nos. 23 to 25)

The pie chart given below represents the number of valid votes obtained by four students who contested election for school captain. The total number of valid votes polled was 720. Study the chart and answer the questions given below :



23. What was the minimum number of votes obtained by any candidate?
- A. 120  
B. 100  
C. 125  
D. 60

24. The number of votes obtained by winning candidate was -

- A. 300
- B. 340
- C. 240
- D. 200

25. By how many votes did the winner defeat his nearest rival?

- A. 50
- B. 40
- C. 30
- D. 35

### General Mental Ability

26. Which is the number that falls in the following series :

7, 15, 32, ?, 138, 281

- A. 85
- B. 64
- C. 67
- D. 104

27. Sam ranked ninth from the top and thirty-eighth from the bottom in a class. How many students are there in the class?

- A. 46
- B. 45
- C. 47
- D. 48

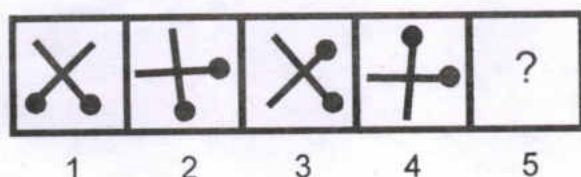
28. There is a question mark in the blank space of the question in which one of the four alternative given under the question satisfy the same relationship as is found between two terms to the left of sign :: given in the question. Find the correct alternative?

3 : 16 :: 7 : ?


- A. 49
- B. 64
- C. 52
- D. 73

29. The question given below is on series. On the left is a problem figure and on the right is option figure. The four problem figure form a continuous series. Find out the relationship between the problem figure and determine the fifth figure from the options given on the right-

Problem Figure

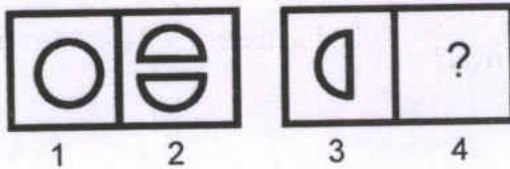


Option Figure

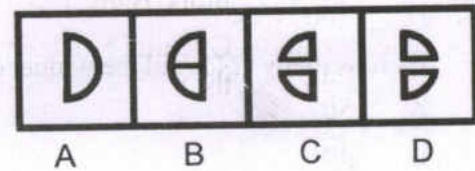


30. The question given below is on analogy. In the problem figure there is a definite relationship between figures 1 and 2. Establish a similar relationship between the figures 3 and 4 by choosing a suitable figure from the options given on the right.

Problem Figure



Option Figure



Accountancy

31. In GAAP, P stands for –
- Prospectus
  - Practices
  - Problem
  - Price
32. When was Accounting Standard Board of India constituted?
- 1969
  - 1977
  - 1918
  - 2007
33. Revenue Recognition is associated with-
- AS-10
  - AS-9
  - AS-20
  - AS-26
34. Which of the following is referred to as the Matching Concept ?
- the accrual concept
  - the prudence concept
  - the going concern concept
  - the consistency concept
35. Fixed assets are always kept in books at their cost price because of :
- Historical cost concept
  - Dual aspect concept
  - Prudence concept
  - Materiality concept
36. The credit entry for net profit is on the credit side of:
- The trading account
  - The drawings account
  - The capital account
  - The profit and loss account



37. The descending order in which current assets should be shown in the balance sheet is:
- Debtors, Stock, Bank, Cash
  - Cash, Bank, Debtors, Stock
  - Stock, Debtors, Cash, Bank
  - Stock, Debtors, Bank, Cash
38. Sales Rs. 8200; Opening Stock Rs. 1300; Closing Stock Rs. 900; Purchases Rs. 6400; Carriage inward Rs. 200, the cost of goods sold figure is:
- Rs. 7000
  - Rs. 6200
  - Rs. 6800
  - None of the above
39. A cash discount is best described as a reduction in the sum to be paid:
- If payment is made by cash, not checked
  - If purchase are made for cash, not on credit
  - If payment is made either by cash or cheque
  - If payment is made within a previously agreed period
40. The total of the Sales Journal is entered on:
- The debit side of the Sales Account in the General Ledger
  - The credit side of the General Account in the Sales Ledger
  - The credit side of the Sales Account in the General Ledger
  - The debit side of the Sales Day Book
41. Given a purchases invoice showing 5 items of Rs. 80 each, less trade discount of 25 per cent and cash discount of 5 per cent, if paid within the credit period, your cheque would be made out for:
- Rs. 260
  - Rs. 280
  - Rs. 285
  - None of the these
42. The total of the Purchases Journal is transferred to the:
- Credit side of the Purchases Account
  - Credit side of the Purchases Book
  - Debit side of the Purchases Account
  - Debit side of the Purchases Day Book
43. In a limited company which of the following are shown in the Appropriation Account?
- Debenture interest
  - Proposed Dividend
  - Transfers to reserves
  - Directors' remuneration
- (i) and (ii)
  - (i) and (iii)
  - (ii) and (iii)
  - (ii) and (iv)



44. Prime cost includes:
- Direct Labour
  - Factory overhead expenses
  - Raw materials consumed
  - Direct expenses
- (i),(iii), and (iv)
  - (i), (ii), and (iii)
  - (ii), (iii) and (iv)
  - (i),(ii) and (iv)
45. If creditors at 1 January 2013 were Rs. 2500, creditors at 31 December 2013 Rs. 4200 and payments to creditors Rs. 32000, then purchases for 2013 are :
- Rs. 31600
  - Rs. 38700
  - Rs. 33700
  - Rs. 30300
46. Given opening debtors of Rs. 11500, Sales Rs. 48000 and receipts from debtors Rs. 45000, the closing debtors should total to:
- Rs. 14500
  - Rs. 83500
  - Rs. 18500
  - Rs. 8500
47. When a petty cash book is kept there will be:
- No entries made at all in the general ledger for items paid by petty cash
  - The same number of entries in the general ledger
  - Fewer entries made in the general ledger
  - More entries made in the general ledger
48. A Bank Reconciliation Statement is a statement:
- Sent by the bank when we have made an error
  - Drawn up by the bank to verify the cash book
  - Sent by the bank when the account is overdrawn
  - Drawn up by us to verify our cash book balance with the bank statement balance
49. Capital Expenditure is :
- The costs of running the business on a day-to-day basis
  - Money spent on buying fixed assets or adding value to them
  - Money spent on selling fixed assets
  - The extra capital paid in by the proprietor

50. A firm bought a machine for Rs. 16000. It is expected to be used for 5 years then sold for Rs.1000. What is the annual amount of depreciation if the straight line method is used?
- A. Rs. 3750
  - B. Rs. 3100
  - C. Rs. 3200
  - D. Rs. 3000

**Economics**

51. The past two decades of globalization has seen rapid movements in:
- A. Goods, services, and people between countries
  - B. Goods, services and investments between countries
  - C. Goods, investments and people between countries
  - D. None of these
52. Ford Motors entered the Indian automobile business in collaboration with which Indian manufacturer?
- A. Mahindra and Mahindra
  - B. Tata Motors
  - C. Maruti Suzuki
  - D. Hindustan Motors
53. Which of the following is a function of money?
- A. Medium of Exchange
  - B. Store of Value
  - C. Transfer of value
  - D. All of the above
54. Inter-bank lending and borrowing takes place in
- A. Capital market
  - B. Money market
  - C. Debt market
  - D. Call money market
55. In India, national income is estimated by
- A. Central Statistical Organization
  - B. Planning Commission
  - C. Finance Commission
  - D. None of the above

56. Consider the following statements:

The study of national income accounts is of great importance because it

1. Reveals the changes in the size and composition of the national product
2. Provides us with information about the distribution of national income in the society among various groups
3. Reveals the manner in which national expenditure is divided between consumption and investment.

Of these statements

- A. 1 and 2 are correct
  - B. 2 and 3 are correct
  - C. 1 and 3 are correct
  - D. 1,2 and 3 are correct
57. Human Development Index (HDI) is a composite index of
- A. Health, literacy and employment
  - B. National income, size of population and the general price level
  - C. National income, per capita income and per capita consumption
  - D. Physical resources, monetary resources and population size
58. In which year was demonetization first time announced in India?
- A. 1974
  - B. 1962
  - C. 1999
  - D. 1946
59. Promotional marketing method is used by:
- A. Monopoly
  - B. Oligopoly
  - C. Perfect Competition
  - D. Both (A) and (B)
60. Which is a type of demand?
- A. Gross Demand
  - B. Price Demand
  - C. Large Demand
  - D. None of the above

**English Language**  
**Comprehension**

Passage -

**Read the passage given below carefully and on the basis of your reading the passage answer the question that follow.**

One day a young man was standing in the middle of the town proclaiming that he had the most beautiful heart in the whole valley. A large crowd gathered and they all admired his heart for it was perfect, there was not a mark or a flaw in it-yes, they all agreed it truly was the most beautiful heart they had ever seen.



Suddenly, an old man appeared at the front of the crowd and asked, "Why your heart is not nearly as beautiful as mine?" The crowd and the young man looked at the old man's heart. It was full of scars. It had places where pieces had been removed and other pieces put in but they didn't fit quite right and there were several jagged edges.

The people stared, "How he can say his heart is more beautiful, they thought?" The young man laughed and said, "You must be joking,". "Compare your heart with mine. Mine is perfect and yours is a mess of scar and tears."

"Yes", said the old man "yours is perfect looking but I would never trade with you. You see, every scar represents a person to whom I have given my love-I tear out a piece of my heart and give it to them, and often they give me a piece of their heart which fits into the empty place in my heart, but because the pieces aren't exact, I have some rough edges, which I cherish because they remind me of the love we shared."

"Sometimes I have given joys of my heart away, and the other person hasn't returned a piece of his heart to me. These are the empty gouges-giving love, is taking a chance. Although these gouges are painful, they stay open, reminding me of the love I have for these people too, and I hope some day they may return and fill the space I have been waiting. So now, do you see what true beauty is?"

The young man stood silently with tears running down his cheeks. He walked up to the old man, reached into his perfect young and beautiful heart and ripped a piece out. He offered it to the old man with trembling hands. The old man took his offering, placed man's heart. It fit, but not perfectly as there were some jagged edges. The young man looked at his heart, not perfect anymore but more beautiful than ever, since love from the old man's heart flowed into his. (A piece of my heart, Young Bhaskar)

61. People first thought the young man's heart was the most beautiful one because ...
  - A. he was handsome.
  - B. there were no marks in it.
  - C. there were lot of marks in it.
  - D. he was admired.
62. The young man thought that ....
  - A. a heart without any mark is the beautiful heart.
  - B. a heart without any injury is the beautiful heart.
  - C. a heart with much injury alone is the beautiful heart.
  - D. all hearts with injuries are beautiful ones.
63. Why was the old man's heart full of scars ?
  - A. the old man fought with many people and sustained injuries.
  - B. the old man exchanged his heart with others.
  - C. the old man sold his heart for money.
  - D. the old man did not get back some of his heart.
64. Which of the following statement is true of the young man?
  - A. the young man first believed his heart was superior but changed his views after seeing the old man's heart.
  - B. the young man believed that old man's heart was not the most beautiful one.
  - C. the young man's heart was the most beautiful one.
  - D. the young man exchanged his heart with the old man.

65. What did the young man do to make his heart beautiful in the end?
- A. he gave a piece of his heart to fill the gap in the old man's heart.
  - B. he took a piece of old man's heart to fix in his heart.
  - C. both the young man and old man exchanged pieces of their hearts.
  - D. the old man gave a piece of his heart to the young man.

**Vocabulary**

**Read the gapped passage given below very carefully and select the most suitable option from the list according to the corresponding number in the passage. The gaps have been numbered accordingly.**

Being collectors and designers of art glass, we choose every single piece of our selection (66) -----, checking on quality and details (67) ----- . We can provide our clients with special custom-made pieces, blown and crafted (68) ----- the watchful eyes of our staff, (69) ----- passion during the design, the making, the sale and after the sale. Art of Venice Gallery chooses every single pieces and supplies directly from Murano, without any (70) ----- from agent or distributors.

- 66. A. exactly
  - B. meticulously
  - C. accurately
  - D. precisely.
- 67. A. with utmost care
  - B. carefully
  - C. with extra care
  - D. regularly.
- 68. A. in
  - B. under
  - C. below
  - D. inside.
- 69. A. forced by
  - B. driven by
  - C. pushed by
  - D. guided by
- 70. A. interruption
  - B. interference
  - C. arbitration
  - D. intervention

**Which of these words is synonym to the word provided .**

71. Kin  
A. Friend  
B. Relative  
C. Parents  
D. Enemy
72. Pensive  
A. Oppressed  
B. Raged  
C. Thoughtful  
D. Happy
73. Solemn  
A. Amusing  
B. Harmful  
C. Calm  
D. Serious

**Which of these words is the most appropriate antonym of the word provided.**

74. Dearth  
A. Lack  
B. Poverty  
C. Abundance  
D. Less
75. Foremost  
A. Hindmost  
B. Unimportant  
C. Disposed  
D. Important

**For each of the following sentences four alternatives are given. Choose the correct meaning of the underlined idioms in the sentences.**

76. After having finished the last project, I find myself at a loose end.  
A. Happy  
B. Free on vacation  
C. Free of troubles  
D. With nothing do to
77. I just paid him a left handed compliment.  
A. An honest  
B. Well deserved  
C. An insincere  
D. A flattering



**Complete the following sentences with the most appropriate option given below.**

78. It is mother ----- the phone.  
A. in  
B. on  
C. at  
D. by
79. I ----- him since 1990.  
A. have known  
B. know  
C. knew  
D. had known
80. Look out! you ----- off the bike.  
A. will fall  
B. are going to fall  
C. are falling  
D. might fall

**General Knowledge**

81. Prime Minister Narendra Modi launched 'Gram Uday Se Bharat Uday' campaign on 14<sup>th</sup> april on the birth anniversary of  
A. Dr B.R. Ambedkar  
B. Sardar Vallabhbhai Patel  
C. Dr. APJ Abdul Kalam  
D. Pandit Jawaharlal Nehru
82. International Yoga Day is observed on  
A. 21<sup>st</sup> May  
B. 22<sup>nd</sup> June  
C. 23<sup>rd</sup> July  
D. 21<sup>st</sup> June
83. Who is the incumbent Governor of RBI?  
A. Raghuram Rajan  
B. Urjit Patel  
C. S. S. Mundra  
D. N. S. Vishwanathan
84. Which film was declared as the best film in 62<sup>nd</sup> filmfare awards.  
A. Sultan  
B. Dangal  
C. Nil Battey Sannata  
D. Ae Dil Hai Mushkil

85. Who won Miss World 2017 title?
- A. Manushi Chhillar
  - B. Stephanie Del Valle
  - C. Priyanka Chopra
  - D. Andrea Meza
86. Who is the National Security Advisor of India?
- A. Brajesh Mishra
  - B. Dr Arvind Gupta
  - C. Ajit Doval
  - D. None
87. Sikkim's first Vocational College is opened at
- A. Mangshila
  - B. Khamdung
  - C. Dentam
  - D. Chakung
88. Bharatmala Parayojana of Central Government of India is related to
- A. Housing Project
  - B. Road and Highway Project
  - C. Family and Health Welfare Project
  - D. Postal Project
89. Which one among the following is not a member of BRICS?
- A. Sweden
  - B. Brazil
  - C. India
  - D. China
90. Which country won the FIFA U-17 World Cup Tournament?
- A. Germany
  - B. England
  - C. Spain
  - D. Brazil
91. Nirmala Sitaraman is the ——— women Defence Minister of the Union of India.
- A. 2<sup>nd</sup>
  - B. 1<sup>st</sup>
  - C. 3<sup>rd</sup>
  - D. 4<sup>th</sup>

92. Sikkim Red Panda Winter Carnival festival 2018 was held between
- A. 9<sup>th</sup> January to 19<sup>th</sup> January
  - B. 7<sup>th</sup> January to 18<sup>th</sup> January
  - C. 8<sup>th</sup> January to 18<sup>th</sup> January
  - D. 9<sup>th</sup> January to 17<sup>th</sup> January
93. Who is the HRDD Minister of the Union of India?
- A. Sushma Swaraj
  - B. Prakash Javedkar
  - C. Smriti Irani
  - D. Kapil Sibal
94. Which among the following is the first city in India to have Wi-Fi connectivity in public place?
- A. Delhi
  - B. Kolkata
  - C. Hyderabad
  - D. Mumbai
95. Which state won the first North East Girl's Basketball Championship held at Nagaon, Assam from 27<sup>th</sup> December to 30<sup>th</sup> December 2017?
- A. Mizoram
  - B. Manipur
  - C. Sikkim
  - D. Assam
96. The Chief of Army Staff of India is-
- A. General Dalbir Singh Suhag
  - B. Admiral Sunil Lamba
  - C. Birendra Singh Dhanoa
  - D. General Bipin Rawat
97. Which of the following is an example of ball and socket joint in human body?
- A. Wrist joint
  - B. Hip joint
  - C. Finger joint
  - D. Neck joint
98. The first Arjuna Awardee from Sikkim is -
- A. Tarundeep Rai
  - B. Chunga Sherpa
  - C. Bhaichung Bhutia
  - D. Jasral Pradhan



99. Which of the following is /are the classical languages of India?

- i) Tamil
- ii) Sanskrit
- iii) Hindi
- iv) Odia

Choose the correct option-

- A. (i)
- B. (ii) & (iii)
- C. (i), (ii) & (iv)
- D. All of the above

100. Which of the following is /are true regarding Tsunami?

- i) Tsunami can be generated by impulsive displacement of the sea-bed level
- ii) Tsunami waves have very large wavelength
- iii) Tsunami appears on the shore as a rapidly advancing or receding tide

Choose the correct option-

- A. (i) & (ii)
- B. (i) & (iii)
- C. (ii) & (iii)
- D. (i), (ii) & (iii)

#### Computer

101. What is the shortcut key you can press to create a copyright symbol?

- A. Alt + Ctrl + C
- B. Alt + C
- C. Ctrl + C
- D. Ctrl + Shift + C

102. The keystrokes Ctrl + I is used to

- A. Increase font size
- B. Inserts a line break
- C. Indicate the text should be bold
- D. Applies italic format to selected text

103. What are the individual dots which make up a picture on the monitor screen called ?

- A. Coloured spots
- B. Pixels
- C. Pixies
- D. Mega Pixels

104. Formulas in Excel start with?
- A. @
  - B. {
  - C. =
  - D. %
105. Which of the following windows version support 64 bit processor?
- A. Windows 98
  - B. Windows 2000
  - C. Windows XP
  - D. Windows 95
106. When a peripheral device needs immediate attention from the operating system, it generates -----
- A. Interrupt
  - B. Spool
  - C. Stack
  - D. Page file
107. Which of the following does not occur during the power -on-self-test (POST)?
- A. The scandisk utility begins to run
  - B. The video card and video memory are tested
  - C. The BIOS identification process occurs
  - D. Memory chip are checked to ensure that they are working properly
108. Which of the following are components of Central Processing Unit ( CPU)?
- A. Arithmetic Logic Unit, Mouse
  - B. Arithmetic Logic Unit, Control Unit
  - C. Arithmetic Logic Unit, Integrated Circuits
  - D. Control Unit, Monitor
109. Where is RAM located?
- A. Expansion Board
  - B. External Drive
  - C. Mother Board
  - D. All of the above
110. Full form of URL is -----
- A. Uniform Resource Locator
  - B. Uniform Resource Link
  - C. Uniform Registered Link
  - D. Unified Resource Link